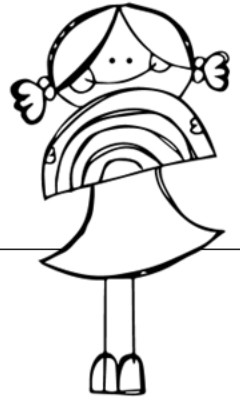


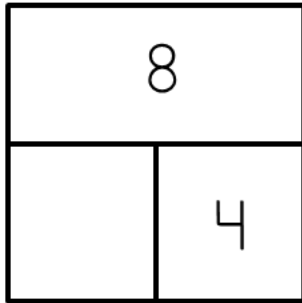
Name _____

Score _____

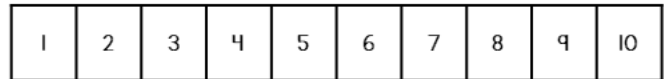
April: Day 15



Write the missing number in the number bond.



How many units long?



Write a word problem using the numbers 8 and 6.
Then solve the problem. Be sure to write small and neat!

_____ units

Write 4 words that are in the word family.



Is the underlined verb past, present or future tense? **Circle** your answer.

1. We painted a picture in art today! past present future
2. Do you like the picture I am painting? past present future
3. May I please paint during centers today? past present future



Fix the sentence and write it correctly on the line.

wen do we goes hom
