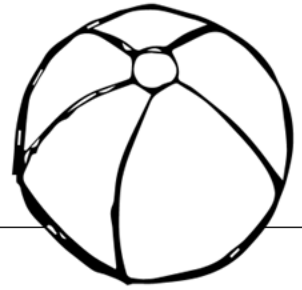


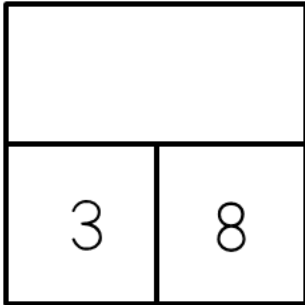
Name \_\_\_\_\_

Score \_\_\_\_\_

# May: Day 6




Write the missing number in the number bond.




Solve.

There are 4 hamsters and 7 goldfish at the pet store.  
How many pets are there in all?



\_\_\_\_\_ pets

Fractions:




Name the shape: \_\_\_\_\_

What fraction is shaded? (Circle the answer)

$\frac{1}{2}$

$\frac{2}{2}$

Spell the word to match each picture below.



\_\_\_\_\_

-----

\_\_\_\_\_

\_\_\_\_\_

-----

\_\_\_\_\_

A B C D E F G H I J K L M N O P Q R S T U V W X Y Z

Write the words in ABC order.

sunshine

wind

flowers

clouds

raindrops

1. \_\_\_\_\_

2. \_\_\_\_\_

3. \_\_\_\_\_

4. \_\_\_\_\_

5. \_\_\_\_\_

Write the sentence correctly. Then circle one: Declarative Interrogative Exclamatory

what did you do on saturday

\_\_\_\_\_

-----

\_\_\_\_\_