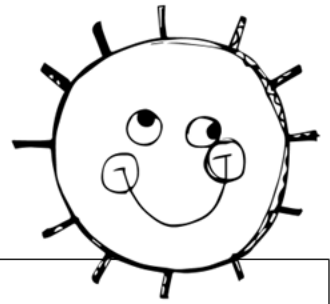


Name _____

Score _____

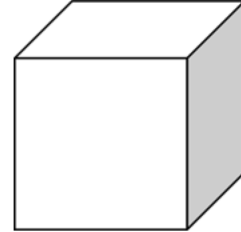
May: Day 2



Add or subtract. Find the missing number.

$\underline{\quad} + 3 = 9$	$9 - \underline{\quad} = 4$
$7 + \underline{\quad} = 12$	$12 - \underline{\quad} = 2$

Shapes & Attributes:



Name the shape: _____

_____ flat surfaces _____ vertices

Can it roll? _____ Can it stack? _____

Show your work. There were 16 kids on the playground. Seven kids were playing kickball. Six kids were playing soccer. The rest were on the swings. How many students were swinging?


_____ students were swinging

Write 4 words that rhyme with:



Circle the correct underlined word to complete each sentence.

- The sand is are hot.
- She is are building a castle.
- They is are splashing in the water.
- He is are having fun!



Write the sentence correctly. Then circle one: Declarative Interrogative Exclamatory

summer is just around the corner

